

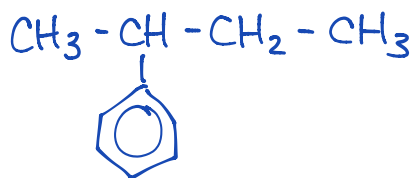
Aromatic Hydrocarbons

Name: *Key*
Date:

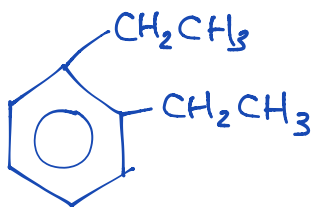
1.		4-phenyl-2-hexene
2.		ethylbenzene
3.		1,3-dimethylbenzene
4.		1,2-dimethylbenzene
5.		3-methyl-2-phenylbutane
6.		3-methyl-1-propylbenzene
7.		2,2-dimethyl-5-phenylhexane

Draw the **condensed structural formula** for the following organic compounds:

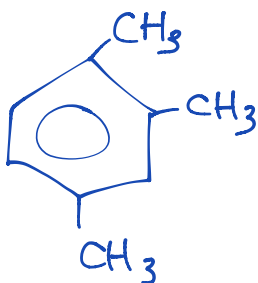
8. 2-phenylbutane



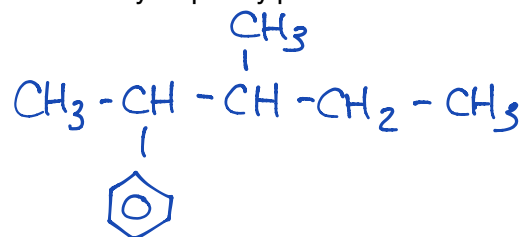
9. 1,2-diethylbenzene



10. 1,2,4-trimethylbenzene



11. 3-methyl-2-phenylpentane



12. 1,2-dichlorobenzene

