

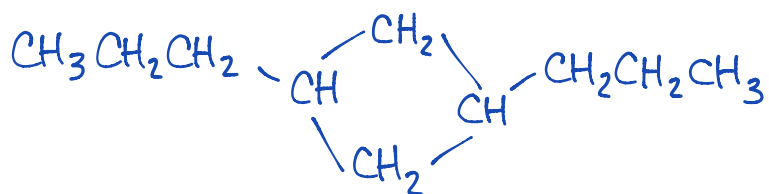
Cycloalkanes

Name: *Key*
Date:

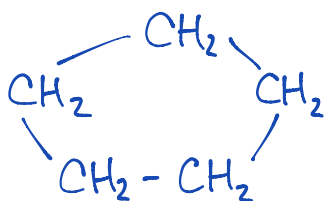
1.		Cyclodecane
2.		1-cyclopentylcyclodecane
3.		1,3-diethyl-5,7-dimethyl Cyclononane
4.		1-ethyl-2-methyl- 1,3-dipropylcyclopentane
5.		3-butyl-1,1-dimethyl- 5-propylcyclohexane
6.		1,3-diethylcyclohexane
7.		1,2-dimethylcyclopropane

Draw the condensed structural formula for the following organic compounds:

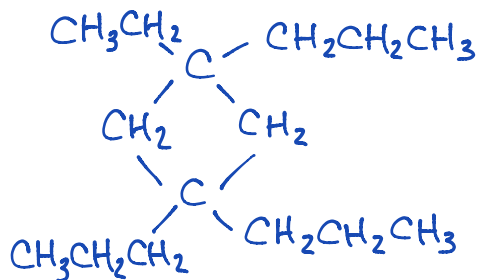
8. 1,3-dipropylcyclobutane



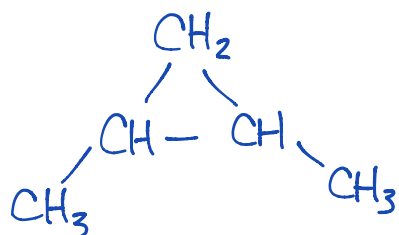
9. cyclopentane



10. 1-ethyl,1,3,3-tripropylcyclobutane



11. 1,2-dimethylcyclopropane



12. 1,3-dipropylcyclodecane

